

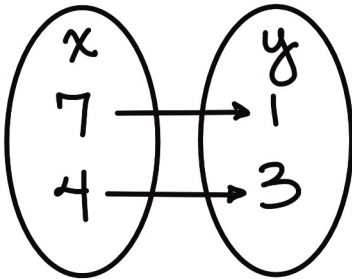
# Functions: Lesson 1

## What is a Function?: Worksheet 1

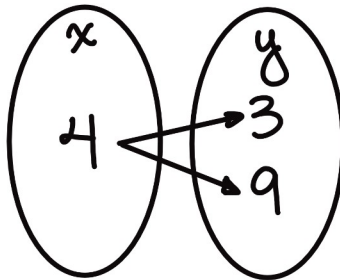
Name: \_\_\_\_\_



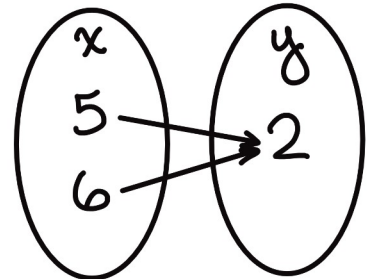
Determine if these are functions:



\_\_\_\_\_



\_\_\_\_\_

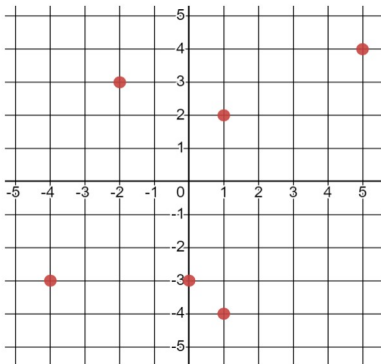


\_\_\_\_\_

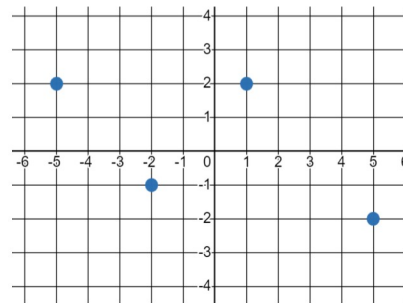
$\{(0.5, 7), (5, 3), (0.3, 7)\}$  \_\_\_\_\_

$\{(\frac{2}{3}, 17), (\frac{2}{3}, 10), (1, \frac{2}{3})\}$  \_\_\_\_\_

$\{(7, 0), (1.3, 5), (10, 2), (5.6, 5.6)\}$  \_\_\_\_\_



\_\_\_\_\_



\_\_\_\_\_

