

Functions: Lesson 2
Domain and Range: Worksheet 1

Name: _____

Answer Key



Find the domain and range of:

$$\{(0, 7), (5, 3), (-2, 7)\}$$

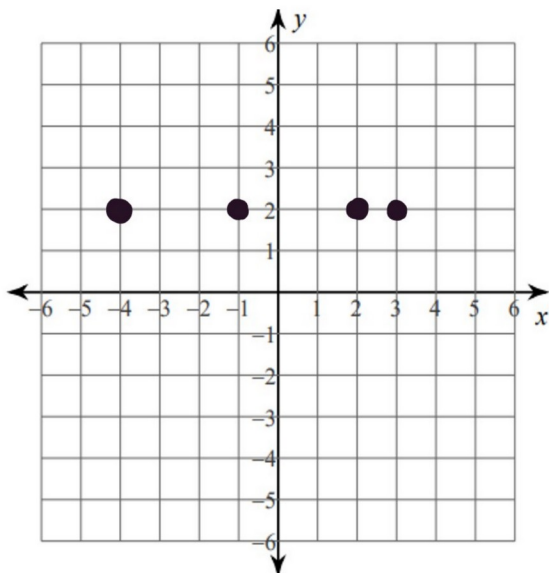
Domain: $\{0, 5, -2\}$

Range: $\{7, 3\}$

$$\{(-6, 1), (4, 3)\}$$

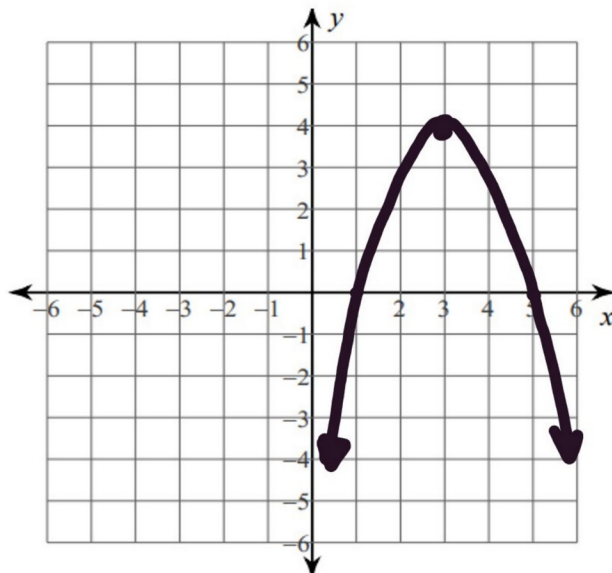
Domain: $\{-6, 4\}$

Range: $\{1, 3\}$



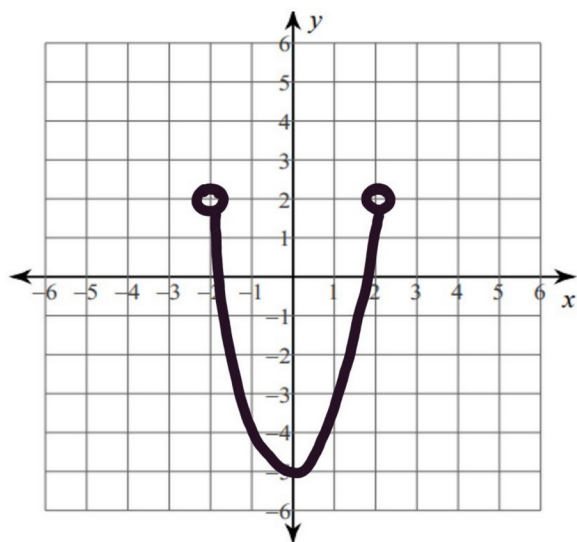
Domain: $\{-4, -1, 2, 3\}$

Range: $\{2\}$



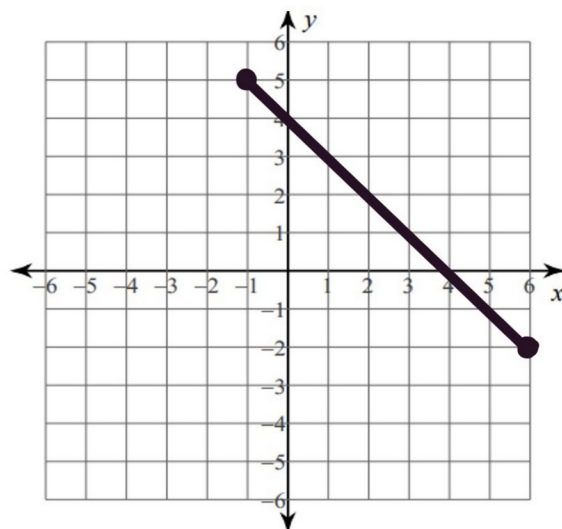
Domain: \mathbb{R} (all real #'s)

Range: $y \leq 4$



Domain: $-2 < x < 2$

Range: $-5 \leq y < 2$



Domain: $-1 \leq x \leq 6$

Range: $-2 \leq y \leq 5$